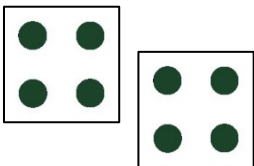


BEGIN  
HERE

How many pips  
in total?



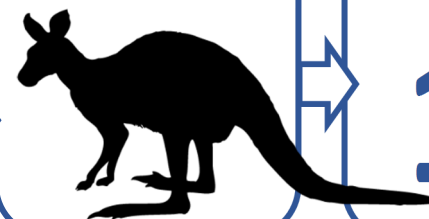
What is this?

R

Can you  
do this?  
Try!




What is this?



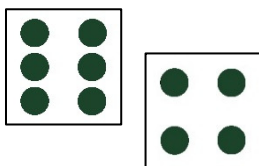
What is this?

10

Name the  
colours!



How many pips  
in total?



What is this?

E

## Preschool, level 3c

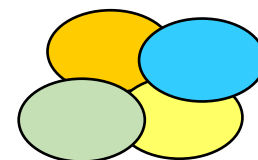
2-3 players and a dice. Roll the dice. The player with the highest number, solves the next square. Roll dice again to decide who solves square number 2 etc. Every square is only solved once.

More ideas:

Show the number with your fingers. How does the number look? What is the thing "in the square" used for? To what can the letter be used? Which sound or letter does the word begin with?

All players do all exercises.

Name the  
colours!



What is this?

D

What is this?



What is this?

11

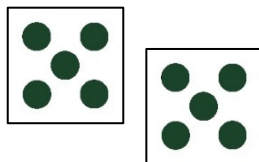
Can you  
do this?  
Try!




What is this?

8

How many pips  
in total?



Name the  
colours!



Can you  
do this?  
Try!



Have a great time.

THE END

What is this?

